


Subtraction

There were 7 birds in a tree and 3 flew away.
Complete the sentences.

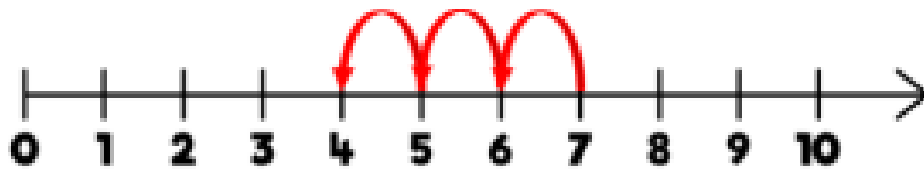


At first there were ____ birds. Then ____ flew away. Now there are ____ birds in the tree.

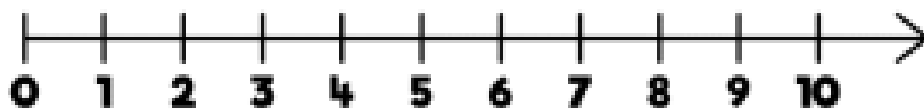
Complete the number sentence.



$$7 - 2 = \underline{\quad}$$



$$7 - 3 = \underline{\quad}$$



$$4 - 4 = \underline{\quad}$$

What's the difference between 10 and 6?



The difference between 10 and 6 is ____



$$10 - 6 = \underline{\quad}$$